

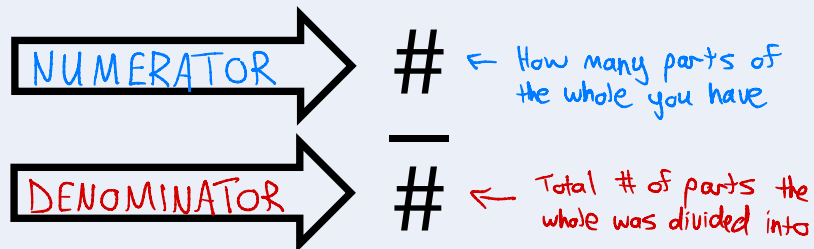
What is a Fraction?

Jensenmath.ca

Instructions: Use the lesson video (<https://youtu.be/NnWvhwT6Tno?si=NoE7UuO3yHPbwnsL>) to complete the following notes. After you have filled out the notes, complete the practice questions.

Notes

When something is broken up into parts, a fraction shows how many of the parts you have. A fraction looks like this:




If you had a pizza cut in to 8 slices, and then you ate some of it. A fraction could be used to describe how much pizza is left.



$$\frac{5}{8}$$

Example 1: What fraction of the shape is shaded?

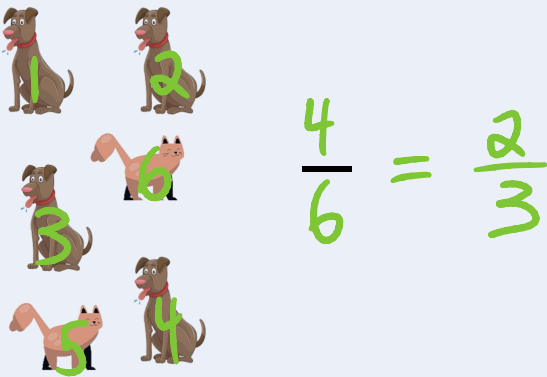


$$\frac{3}{4}$$

Example 2: What fraction of the shape is shaded?

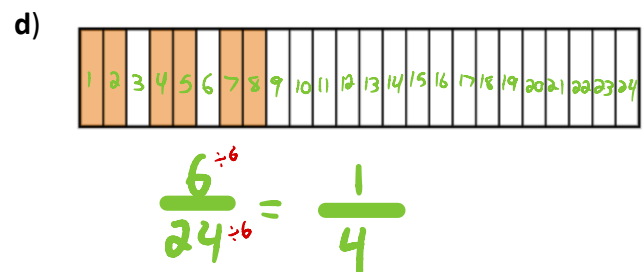
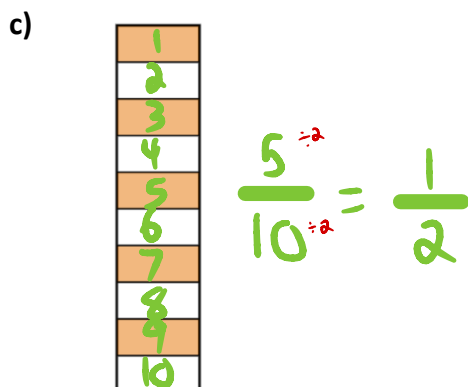
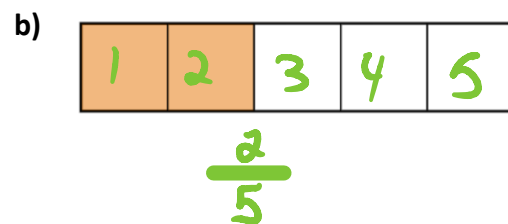
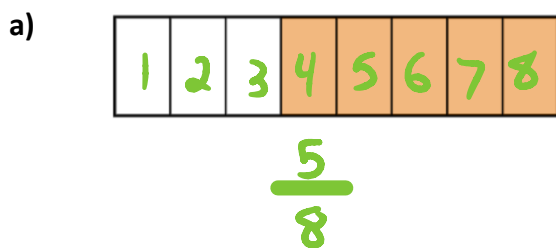


Example 3: What fraction of the animals are dogs?

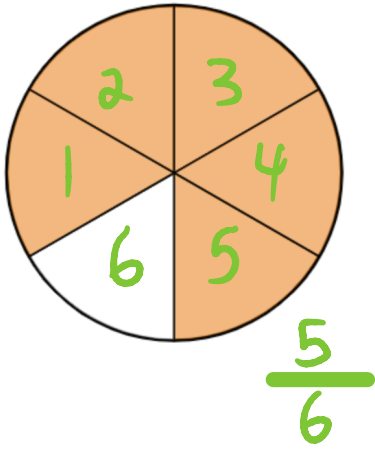


Practice Questions

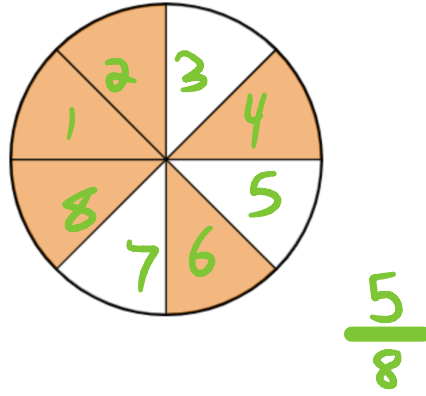
Example 1: What fraction of each shape is shaded?



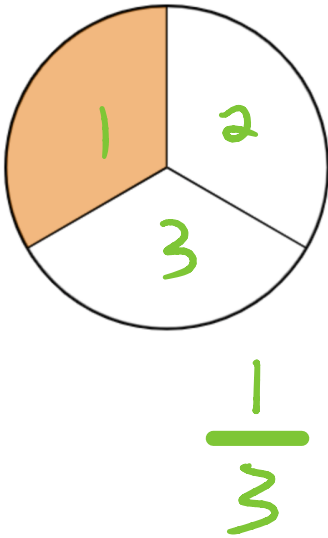
e)



f)



g)



h)

