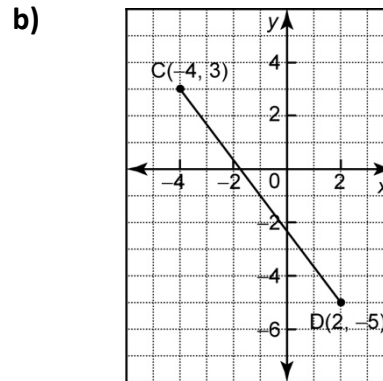
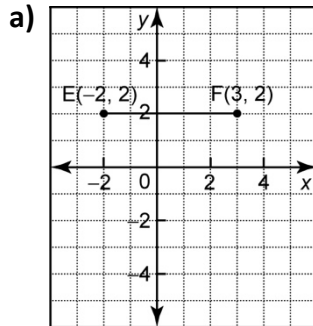


W1 – Midpoint and Length of a Line Segment

MPM2D

Jensen

1) Determine the coordinates of the midpoint of each line segment.



2) Determine the midpoint of the line segment defined by each pair of endpoints.

a) $J(5,7)$ and $K(3,9)$

b) $L(-1,0)$ and $M(1,-6)$

c) $A(5,9)$ and $B(-1,9)$

d) $C(-7,8)$ and $D(-2,-9)$

e) $E\left(\frac{-1}{9}, \frac{-1}{2}\right)$ and $F\left(\frac{14}{9}, \frac{4}{3}\right)$

f) $A\left(\frac{5}{3}, 1\right)$ and $B(0,2)$

g) $G\left(\frac{-3}{2}, \frac{-1}{3}\right)$ and $H\left(\frac{3}{4}, \frac{3}{5}\right)$

h) $M(6.6, 8.52)$ and $N(-5.5, 4.07)$

3) The endpoints of the diameter of a circle are $A(-5, -3)$ and $B(3, 7)$. Find the coordinates of the center of this circle.

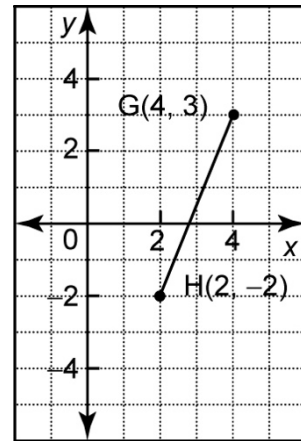
4) One endpoint of a diameter of a circle centered at the origin is $(-5, 2)$. Find the coordinates of the other endpoint of this diameter.

5) For a line segment DE , one endpoint is $D(6,5)$, and the midpoint is $M(4,2)$. Find the coordinates of endpoint E .

6) The endpoints of AB are $A(10,16)$ and $B(-6, -12)$. Find the coordinates of the points that divide the segment into four equal parts.

7) The endpoints of PQ are $P(3, -4)$ and $Q(11, c)$. The midpoint of PQ is $M(d, 3)$. Find the values of c and d .

8) Find the exact length of the line segment.



9) Calculate the exact length of the line segment defined by each pair of endpoints.

a) A(-6, -2) and B(4, 3)

b) C(-2, 0) and D(7, -3)

c) E(-5, -6) and F(-1, -2)

d) G(0, 5) and H(8, -1)

e) (-5, 6) and (3, -2)

f) $\left(-\frac{3}{4}, -\frac{2}{5}\right)$ and $\left(\frac{1}{4}, \frac{3}{5}\right)$

10) On a street map of his town, Jordan's house has coordinates $(8,1)$. The town's two high schools are at $(0,5)$ and $(6,11)$. Which school is closer to Jordan's house?

11) The vertices of $\triangle ABC$ are $A(2,5)$, $B(-6, -1)$ and $C(10, -1)$.

a) Determine the length of each side of this triangle.

b) What is the perimeter of the triangle?

c) Classify the triangle.

12) A circle has a diameter with endpoints $R(-4, 6)$ and $T(10, -8)$.

a) Find the length of this diameter exactly.

b) Find the length of the radius of this circle. Round to the nearest tenth.

Answers

1)a) $(\frac{1}{2}, 2)$ b) $(-1, -1)$

2)a) $(4, 8)$ b) $(0, -3)$ c) $(2, 9)$ d) $(-\frac{9}{2}, -\frac{1}{2})$ e) $(\frac{13}{18}, \frac{5}{12})$ f) $(\frac{5}{6}, \frac{3}{2})$ g) $(\frac{-3}{8}, \frac{2}{15})$ h) $(0.549, 6.295)$

3) $(-1, 2)$

4) $(5, -2)$

5) $(2, -1)$

6) $(6, 9), (2, 2), (-2, -5)$

7) $c = 10, d = 7$

8) $\sqrt{29}$

9)a) $\sqrt{125} = 5\sqrt{5}$ b) $\sqrt{90} = 3\sqrt{10}$ c) $\sqrt{32} = 4\sqrt{2}$ d) 10 e) $\sqrt{128} = 8\sqrt{2}$ f) $\sqrt{2}$

10) The school at $(0, 5)$ is closer to Jordan's house.

11)a) $AB = AC = 10, BC = 16$ b) 36 units c) isosceles

12)a) $\sqrt{392} = 14\sqrt{2}$ b) $7\sqrt{2}$