

W1 – 1.1 – Power Functions

MHF4U

Jensen

1) Identify which of the following are polynomial functions:

a) $p(x) = \cos x$

b) $h(x) = -7x$

c) $f(x) = 2x^4$

d) $y = 3x^5 - 2x^3 + x^2 - 1$

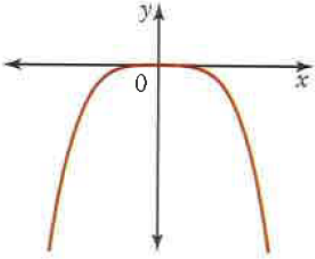
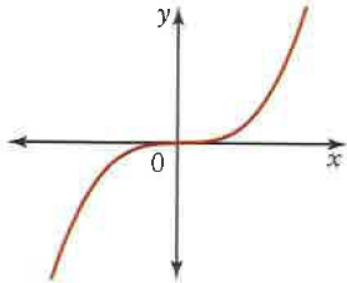
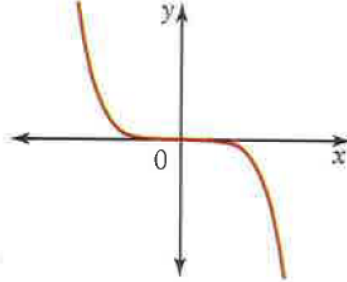
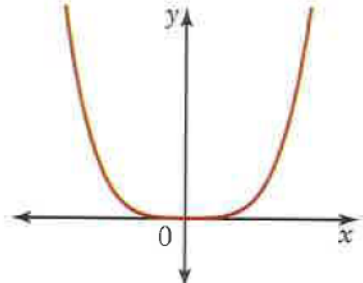
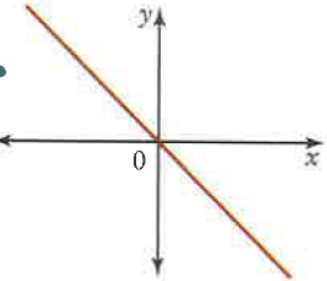
e) $k(x) = 8^x$

f) $y = x^{-3}$

2) State the degree and the leading coefficient of each polynomial

Polynomial	Degree	Leading Coefficient
$y = 5x^4 - 3x^3 + 4$		
$y = -x + 2$		
$y = 8x^2$		
$y = -\frac{x^3}{4} + 4x - 3$		
$y = -5$		
$y = x^2 - 3x$		

3) Complete the following table

Graph of Function	Even or Odd Degree?	Sign of Leading Coefficient	Domain and Range	Symmetry	End Behaviour
					
					
					
					
					

4) Match each function to its end behavior

$$y = -x^3$$

$$y = \frac{3}{7}x^2$$

$$y = 5x$$

$$y = 4x^5$$

$$y = -x^6$$

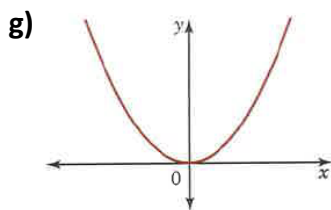
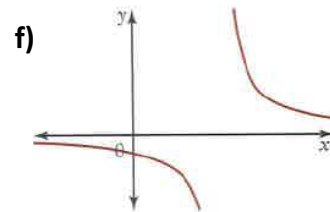
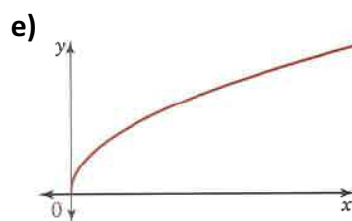
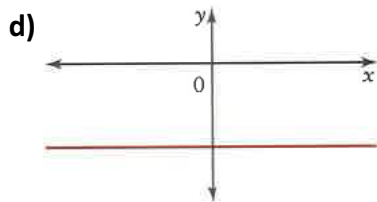
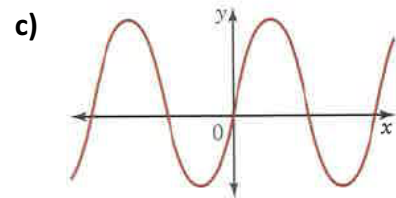
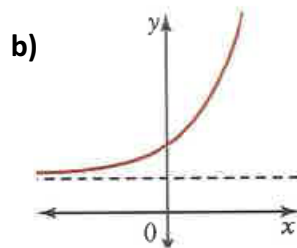
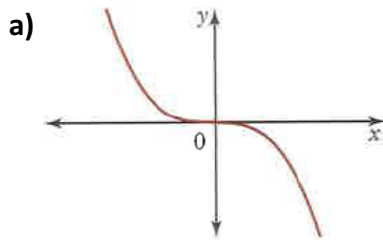
$$y = -0.1x^{11}$$

$$y = 2x^4$$

$$y = -9x^{10}$$

End Behaviour	Functions
Q3 to Q1	
Q2 to Q4	
Q2 to Q1	
Q3 to Q4	

5) Determine whether each graph represents a power function, exponential function, a periodic function, or none of these.



Answer Key

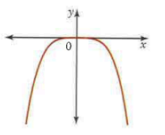
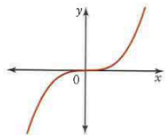
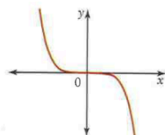
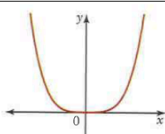
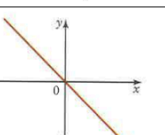
W1

1) a) No b) Yes c) Yes d) Yes e) No f) No

2)

Polynomial	Degree	Leading Coefficient
$y = 5x^4 - 3x^3 + 4$	4	5
$y = -x + 2$	1	-1
$y = 8x^2$	2	8
$y = -\frac{x^3}{4} + 4x - 3$	3	$-\frac{1}{4}$
$y = -5$	0	-5
$y = x^2 - 3x$	2	1

3)

Graph of Function	Even or Odd Degree?	Sign of Leading Coefficient	Domain and Range	Symmetry	End Behaviour
	EVEN	NEGATIVE	D: $\{X \in \mathbb{R}\}$ R: $\{Y \in \mathbb{R} y \leq 0\}$	Line	Q3 to Q4
	ODD	POSITIVE	D: $\{X \in \mathbb{R}\}$ R: $\{Y \in \mathbb{R}\}$	Point	Q3 to Q1
	ODD	NEGATIVE	D: $\{X \in \mathbb{R}\}$ R: $\{Y \in \mathbb{R}\}$	Point	Q2 to Q4
	EVEN	POSITIVE	D: $\{X \in \mathbb{R}\}$ R: $\{Y \in \mathbb{R} y \geq 0\}$	Line	Q2 to Q1
	ODD	NEGATIVE	D: $\{X \in \mathbb{R}\}$ R: $\{Y \in \mathbb{R}\}$	Point	Q2 to Q4

4)

End Behaviour	Functions
Q3 to Q1	$y = 4x^5, y = 5x$
Q2 to Q4	$y = -x^3, y = -0.1x^{11}$
Q2 to Q1	$y = 2x^4, y = \frac{3}{7}x^2$
Q3 to Q4	$y = -x^6, y = -9x^{10}$

5) a) power b) exponential c) periodic d) power e) none (square root) f) none (rational) g) power